


Name: _____


How Many Left?

Subtraction is taking one number away from another number. Using the pictures, cross off the amount you are taking away to get your answer.


Example:



$$10 - 4 = \underline{\quad}$$



$$13 - 6 = \underline{\quad}$$




$$9 - 8 = \underline{\quad}$$

Name: _____

How Many Left?


Subtraction is taking one number away from another number. Using the pictures, cross off the amount you are taking away to get your answer.



$$12 - 6 = \underline{\quad}$$



$$11 - 3 = \underline{\quad}$$



$$14 - 4 = \underline{\quad}$$